










Red Cabbage Indicator

Name: _____



- Test each substance in the table with red cabbage indicator:
 - *Put a small sample of the substance in a dimple*
 - *Add a couple of drops of indicator*
 - *Record the colour and pH in the results table*










	Tooth-paste 	Fizzy Juice 	Bicarb of soda 	Lemon Juice 	Lime Juice 	Liquid Soap 	Yoghurt 	Milk 	Water 
Colour									
pH									

Red Cabbage Indicator

Name: _____



- Test each substance in the table with red cabbage indicator:
 - *Put a small sample of the substance in a dimple*
 - *Add a couple of drops of indicator*
 - *Record the colour and pH in the results table*

	Tooth-paste 	Fizzy Juice 	Bicarb of soda 	Lemon Juice 	Lime Juice 	Liquid Soap 	Yoghurt 	Milk 	Water 
Colour									
pH									

